

XT - NUMERACY Grade 1

Name: _____

Class: _____

Subject: Halving and doubling

Date: _____

Total Marks: 10

Questions 1 to 3 refer to the following graphic

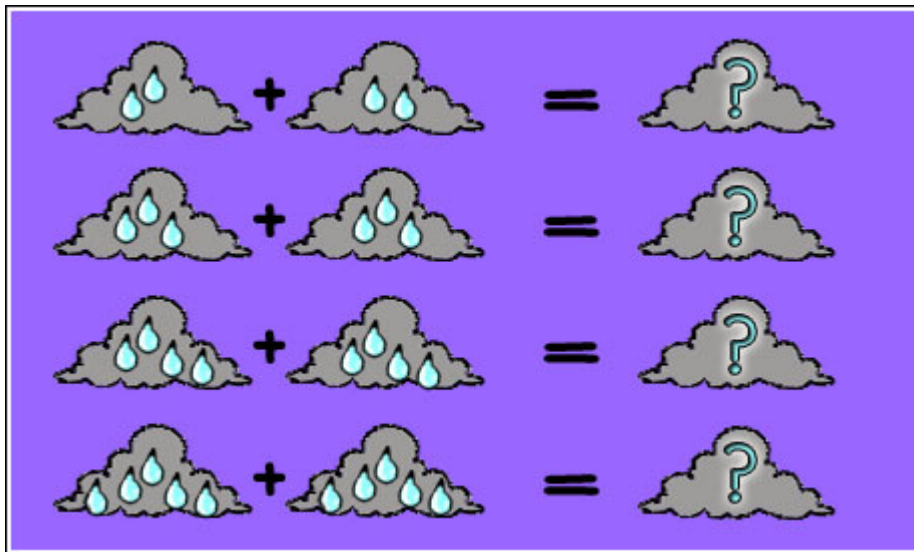


Figure 1: Cloudy drops

Question 1: Cloze [1]

Mathematics - LO 1 : AS 4, AS 10, AS 12

Double 5 gives (1).

1	
---	--

▸4

▸6

▸8

▸10

Question 2: Cloze [1]

Mathematics - LO 1 : AS 4, AS 10, AS 12

Double 4 gives (1).

1	
---	--

▸6

▸8

▸10

▸12

Question 3: Socrates [1]

Mathematics - LO 1 : AS 4, AS 10, AS 12

Double 2 gives ...

--

Question 4 refers to the following graphic




Figure 2: 2VZ23.GIF

Question 4: Multiple Choice [1]

Mathematics - LO 1 : AS 1, AS 12

There are four lions in this zoo.
Half the number of lions is ...

- A 2
- B 3
- C 4

Questions 5 to 6 refer to the following graphic




Figure 3: 1IR21.GIF

Question 5: Multiple Choice [1]

Mathematics - LO 1 : AS 4, AS 10, AS 12

There are four children under the tree.
Double four is ...

- A eight
- B six
- C ten

Question 6: Socrates [1]

Mathematics - LO 1 : AS 4, AS 10, AS 12

There are nine children in the park.
Double 9 is ...

Questions 7 to 8 refer to the following graphic

hands and fingers




Figure 4: 1IR40-Z.GIF

Question 7: Socrates [1]

Mathematics - LO 1 : AS 4, AS 10, AS 12

There are ten fingers.
Half of 10 is ...

Question 8: Multiple Choice [1]

Mathematics - LO 1 : AS 10, AS 12

There are 10 fingers.
Double 10 is ... fingers.

- A 16
- B 18
- C 20

Question 9 refers to the following graphic




Figure 5: 1MC12-Z.GIF

Question 9: Cloze [1]

Mathematics - LO 1 : AS 4, AS 12

There are 12 stars on the flag.
Half of 12 is ().

1	
---	--

6

24

4

Question 10 refers to the following graphic




Figure 6: 1RC30-Z.GIF

Question 10: Cloze [1]

Mathematics - LO 1 : AS 4, AS 10, AS 12

There are 2 cows and 4 sheep.
Double 2 is ().
Double 4 is ().

1	
---	--

2	
---	--

▶8

▶6

▶10

▶4

10 Questions, 6 Pages