

XT - THEMES Grade 2

Name: _____

Class: _____

Subject: At school

Date: _____

Total Marks: 10

Questions 1 to 2 refer to the following graphic

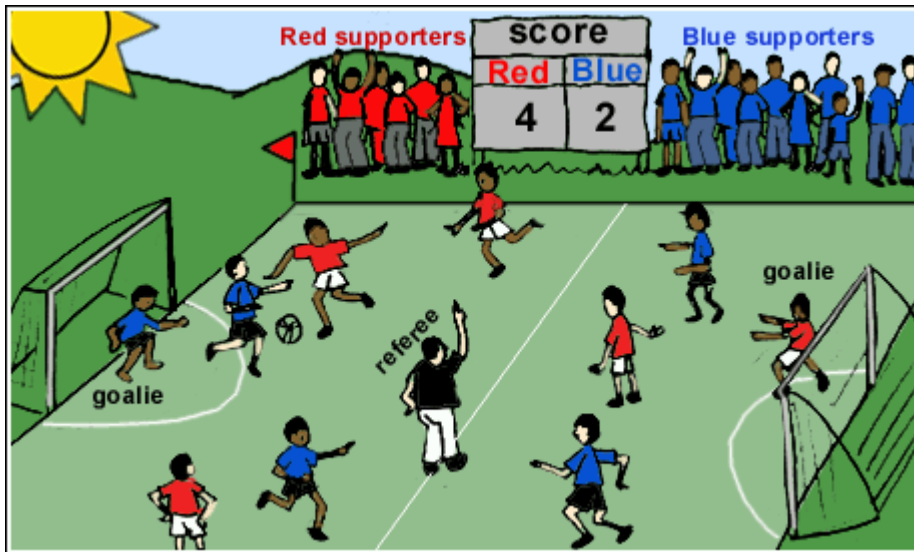


Figure 1: 2VZ17.GIF

Question 1: True/False [1]

Mathematics - LO 1 : AS 11, AS 12

The red team has double the blue team's score.

TRUE

FALSE

Question 2: Multiple Choice [1]

Mathematics - LO 1 : AS 11, AS 12

The game is 20 minutes long.
Half the game is ... long.

A 15 minutes

B 10 minutes

C 40 minutes

Questions 3 to 4 refer to the following graphic



Figure 2: 3MC50.GIF

Question 3: True/False [1]

Life Orientation - LO 3 : AS 5

The children line up quietly outside class.
They follow rules.

TRUE

FALSE

Question 4: Multiple Choice [1]

Life Orientation - LO 3 : AS 1

Ben finds a R5 coin on the playground and hands it in at the office. He ...

A is responsible

B follows rules

C follows instructions

Question 5 refers to the following graphic




Figure 3: 2NV20.GIF

Question 5: Multiple Choice [1]

Mathematics - LO 1 : AS 3, AS 11, AS 12

Count the children in the class.

Each child has two ears.

Half the number of ears is ...

A 10

B 20

C 2

Questions 6 to 8 refer to the following graphic




Figure 4: 02MC20.GIF

Question 6: Socrates [1]

Mathematics - LO 1 : AS 3, AS 4; LO 5 : AS 6

... children play cricket.

Question 7: Socrates [1]

Mathematics - LO 1 : AS 3, AS 6; LO 5 : AS 6

... children take part in swimming.

Question 8: Cloze [1]

Mathematics - LO 1 : AS 3, AS 11; LO 5 : AS 6

(I) children play hockey and rugby altogether.

1	
---	--

▸20

▸22

▸24

Question 9 refers to the following graphic




Figure 5: 02mc19

Question 9: Socrates [1]

Home Language - LO 3 : AS 3, AS 4

The girls practice hockey after ...

Question 10 refers to the following graphic

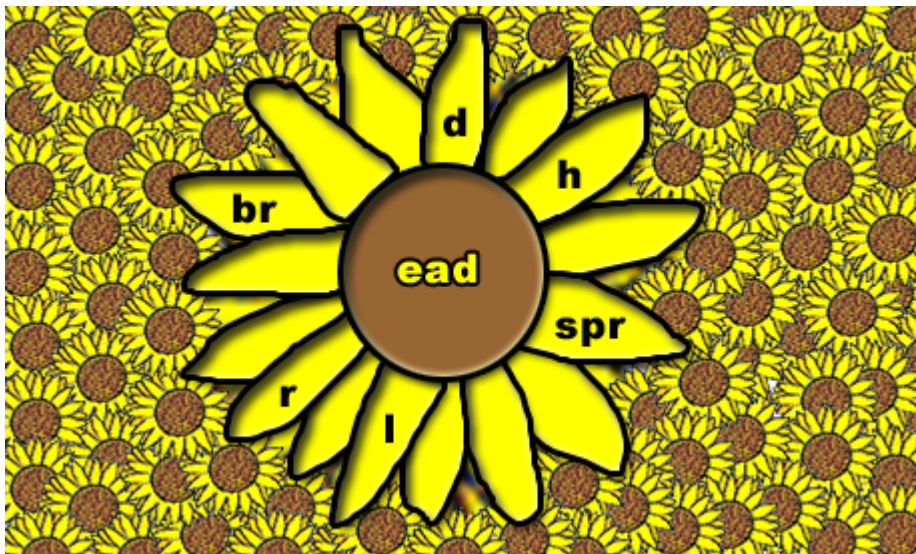


Figure 6: 2MC26.BMP

Question 10: Cloze [1]

Home Language - LO 3 : AS 4, AS 5

The inside of a pencil is called (l).

1	<input type="text"/>
---	----------------------

spread

lead

bread