

XT - THEMES Grade 3

Name: _____

Class: _____

Subject: At home

Date: _____

Total Marks: 10

Questions 1 to 2 refer to the following graphic




Figure 1: 3DH39.GIF

Question 1: True/False [1]

Life Orientation - LO 2 : AS 4 / Home Language - LO 3 : AS 1

When a Zulu family sits down to a meal, the men sit on the right of the hut and the women sit opposite them.

TRUE

FALSE

Question 2: Multiple Choice [1]

Mathematics - LO 1 : AS 11, AS 12

How much lobola did the Zulu chief have to pay for his two wives?

A 33 cows

B 20 cows

C 22 cows

Questions 3 to 4 refer to the following graphic



Figure 2: 3MC62.BMP

Question 3: True/False [1]

Life Orientation - LO 2 : AS 4 / Home Language - LO 3 : AS 1

Home 4 is a Bedouin tent.

TRUE FALSE

Question 4: Multiple Choice [1]

Life Orientation - LO 2 : AS 4 / Home Language - LO 3 : AS 1

Match the home to the name.


Home 5 is a ... hut.

- A Zulu
- B Ndebele
- C San

Question 5 refers to the following graphic


Estimate

1.




7 mL / 7 L / 700 L.

2.




20 mL / 20 L / 2 L.

3.



15 mL / 15 L / 150 L.

4.



500 mL / 500 L / 5 L.

Figure 3: 3MC72.GIF

Question 5: True/False [1]

Mathematics - LO 1 : AS 10; LO 4 : AS 8

Estimate the capacity:

The pot contains 5 litres.

TRUE

FALSE

Questions 6 to 7 refer to the following graphic



Figure 4: 3DH31.GIF

Question 6: Multiple Choice [1]

Home Language - LO 3 : AS 1, AS 5; LO 6 : AS 1

Window 1 is your clue.

The beautiful Cape Dutch home was ... to a very rich man.

- A sold
- B dols
- C gold

Question 7: Socrates [1]

Home Language - LO 3 : AS 1, AS 5; LO 6 : AS 1

Door number 5 will help you arrive.

A homestead built in 1832, is ... than one built in 1898.

Question 8 refers to the following graphic




Figure 5: 3DH40.GIF

Question 8: Socrates [1]

Mathematics - LO 1 : AS 10, AS 12; LO 4 : AS 8

Look at Nomsisi's beautiful pipe.

2 pipes will be ... cm long.

Question 9 refers to the following graphic




Figure 6: 3DH37.GIF

Question 9: Cloze [1]

Mathematics - LO 1 : AS 3, AS 4, AS 6

Count the girls at the table. Use this information to fill in the three missing numbers:

96; 93; 90; (1); 78; 75; 72

1	
---	--

▶85; 82; 79

▶86; 83; 80

▶87; 84; 81

Question 10 refers to the following graphic



Figure 7: Recycle tin cans

Ling has put (1) tin cans in the box. She tidies up some more and puts another 144 tin cans in the box. There are now (2) tin cans in the box.

1		2	
---	--	---	--

▶388

▶522

▶542

▶532