

# XT - THEMES Grade 3

Name: \_\_\_\_\_

Class: \_\_\_\_\_

Subject: Out and about

Date: \_\_\_\_\_

Total Marks: 10

Questions 1 to 2 refer to the following graphic

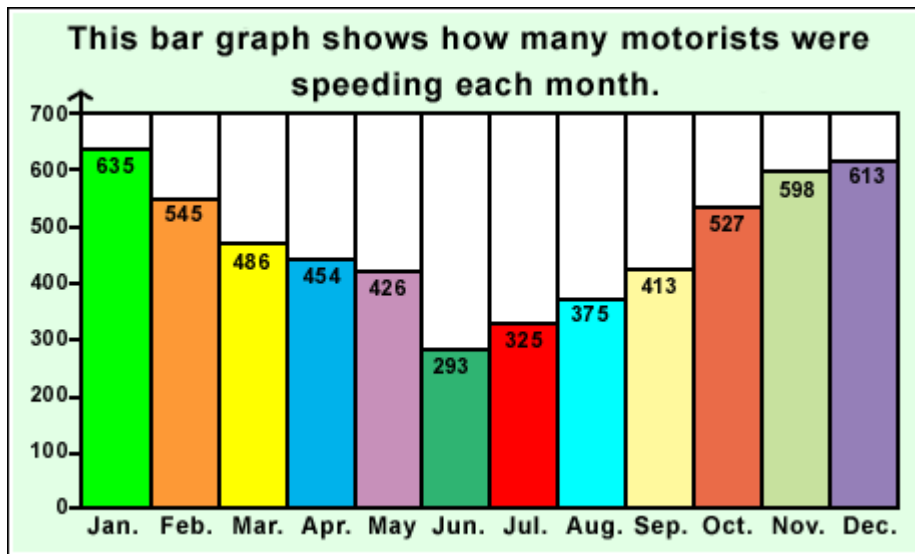


Figure 1: 3HP21.GIF

Question 1: True/False [1]

Mathematics - LO 5 : AS 7

375 people were speeding in August.

TRUE

FALSE

Question 2: Socrates [1]

Mathematics - LO 1 : AS 5, AS 10

Work out the difference between two numbers. In January, ... more people were speeding than in February.

Questions 3 to 4 refer to the following graphic



*Figure 2: Bitmap*

**Question 3: True/False [1]**

Home Language - LO 3 : AS 1

The children in the picture are all enjoying their ride.

**TRUE**

**FALSE**

**Question 4: True/False [1]**

Home Language - LO 3 : AS 1

This is not a safe activity for young children.

**TRUE**

**FALSE**

*Question 5 refers to the following graphic*



Figure 3: 3MC11E.BMP

Question 5: Multiple Choice [1]

Home Language - LO 3 : AS 1; LO 5 : AS 3

A ... puts out fires.

- A fireman
- B policeman
- C traffic officer

Question 6 refers to the following graphic

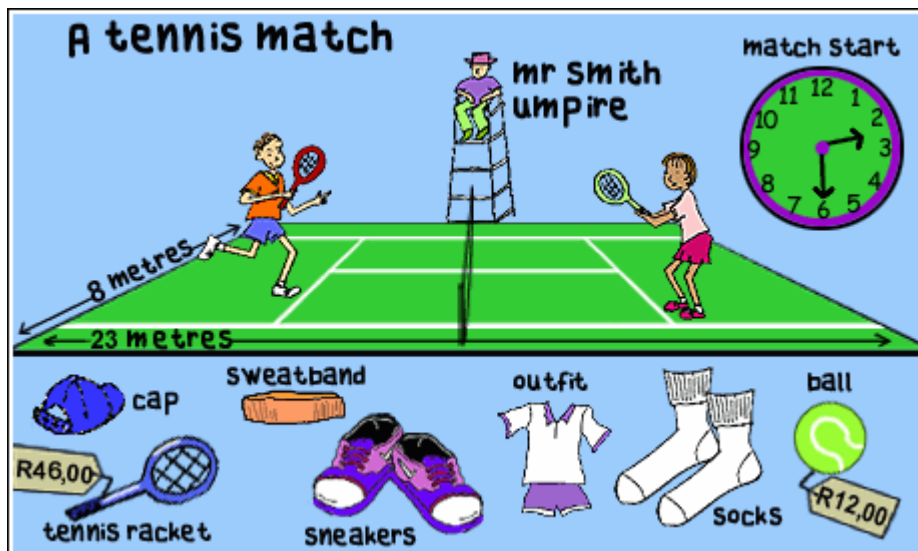


Figure 4: 3DH32.GIF

It is now 4.45 p.m.

How long have the players been on court?

- A 2 hours 15 minutes
- B 2 hours 10 minutes
- C 2 hours 20 minutes

Question 7 refers to the following graphic

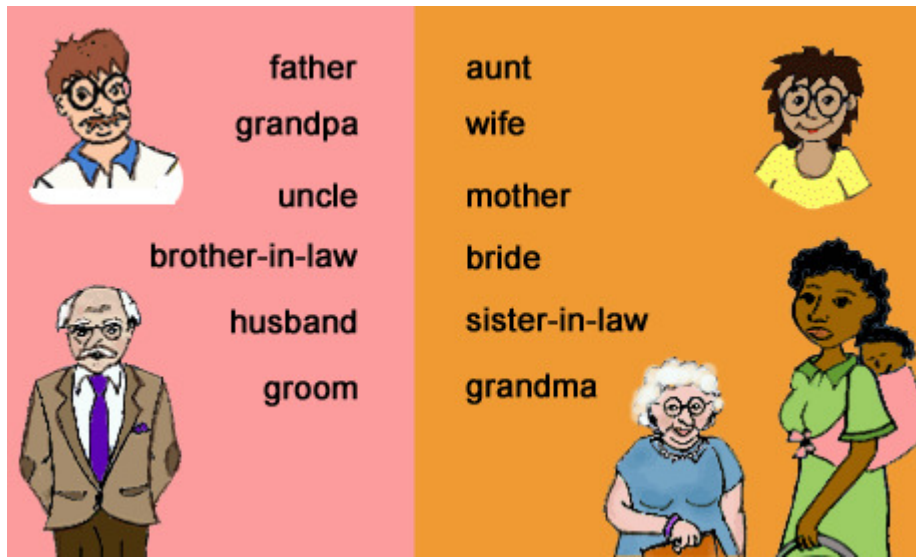


Figure 5: 3MC09.BMP

Question 7: Socrates [1]

Match the pair.

My uncle and ... when on holiday to Cape Town.

Question 8 refers to the following graphic

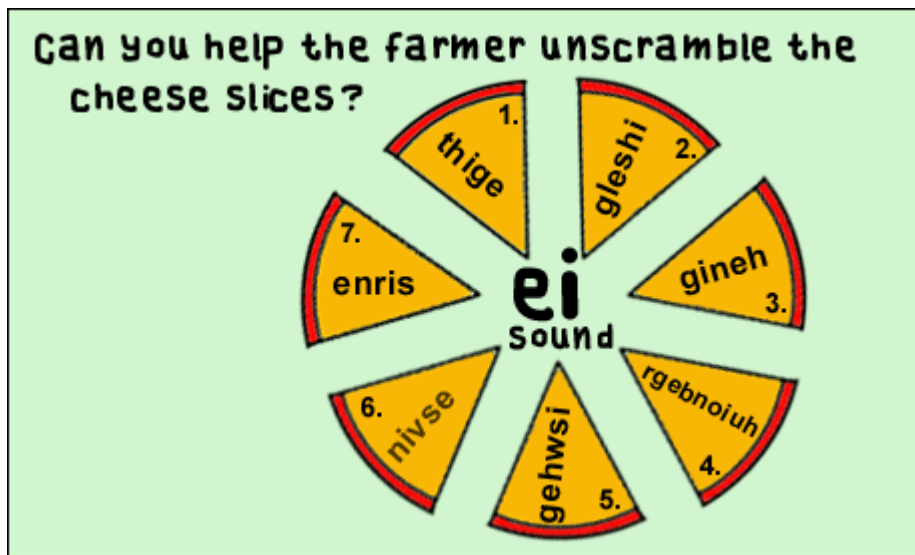


Figure 6: 3DH17.GIF

**Question 8: Socrates [1]**

Home Language - LO 3 : AS 1, AS 5; LO 6 : AS 1

Use cheese slice 7 to help you.

You hold onto these when you ride a horse.

Question 9 refers to the following graphic

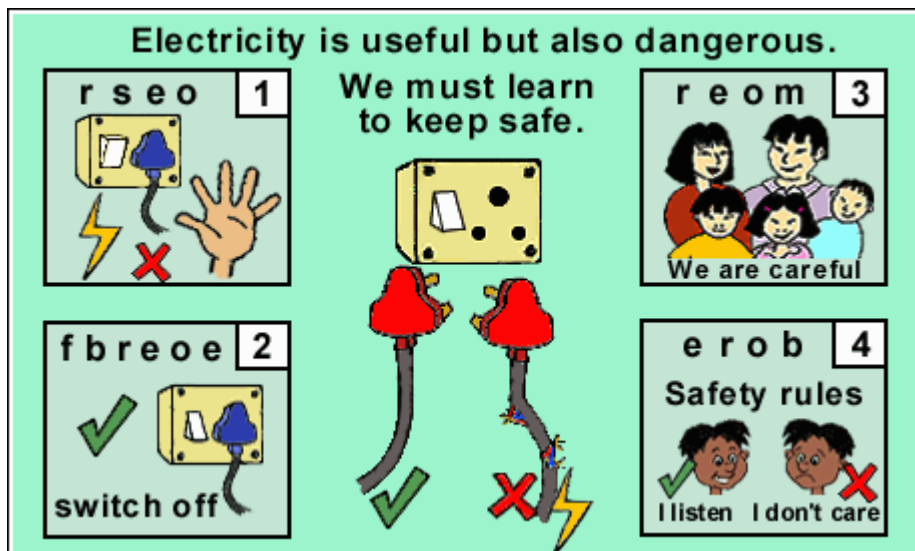


Figure 7: 3HP13.GIF

**Question 9: Cloze [1]**

Mathematics - LO 1 : AS 5, AS 7

Match the number names to their numbers. The number of people hurt in fires caused by frayed wires is four hundred and nineteen (1). The number of people who received electric shocks is four hundred and fifty six (2).

|   |  |
|---|--|
| 1 |  |
|---|--|

|   |  |
|---|--|
| 2 |  |
|---|--|

▶456

▶546

▶419

▶465

Question 10 refers to the following graphic



Figure 8: 3MC55.GIF

Question 10: Cloze [1]

Mathematics - LO 1 : AS 5, AS 7

Match the number names to their numbers. Children often get hurt on the playground. Nurse used four hundred and thirty-one (1) plasters and four hundred and ninety-four (2) bandages.

|   |  |
|---|--|
| 1 |  |
|---|--|

|   |  |
|---|--|
| 2 |  |
|---|--|

▶431

▶413

▶349

▶494

10 Questions, 6 Pages